


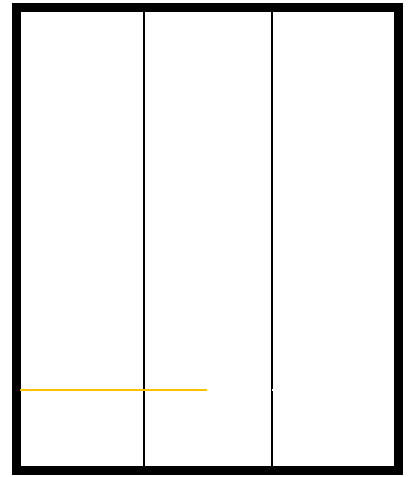


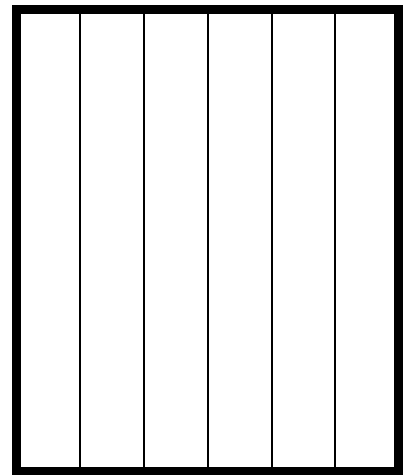
$$\div 2 =$$



$$\div 3 =$$




$$\div 6 =$$


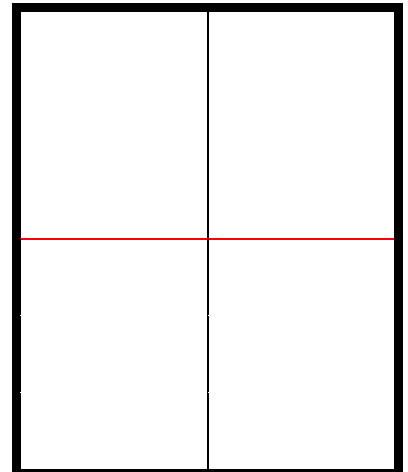


分数入門Q


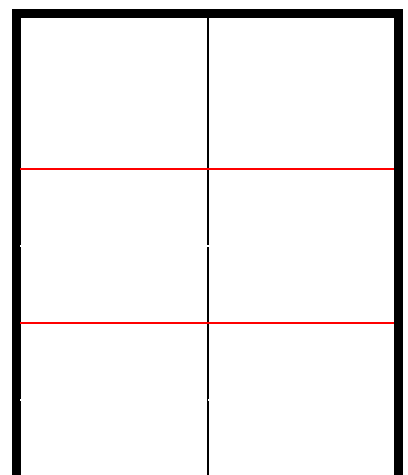
次の図を読みなさい。




$$\div 2 =$$




$$\div 3 =$$


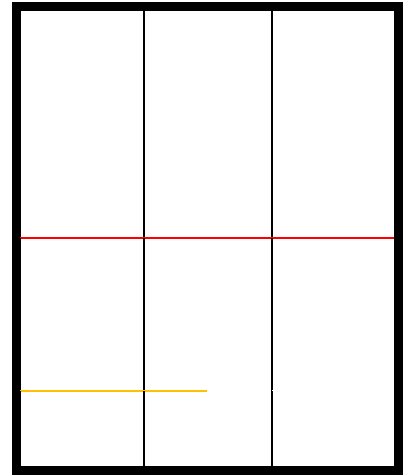


$$\div 6 =$$


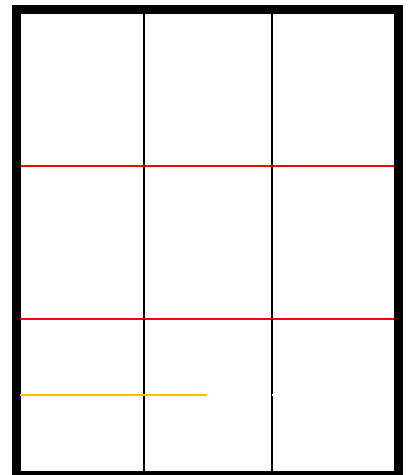





$$\div 2 =$$

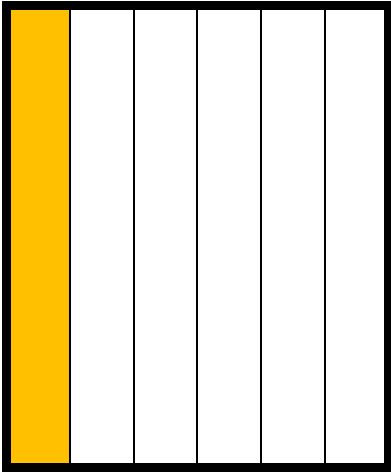


$$\div 3 =$$

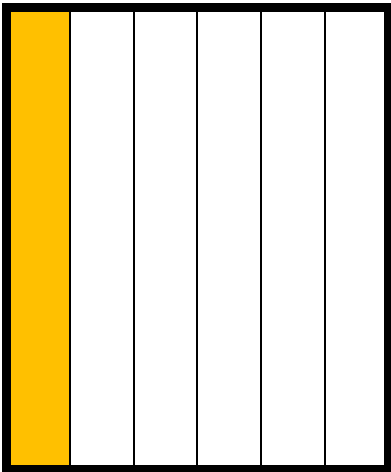
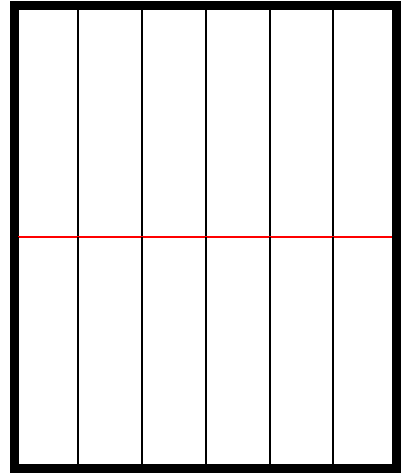


$$\div 6 =$$

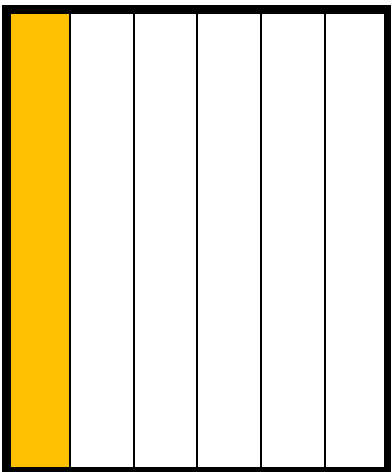
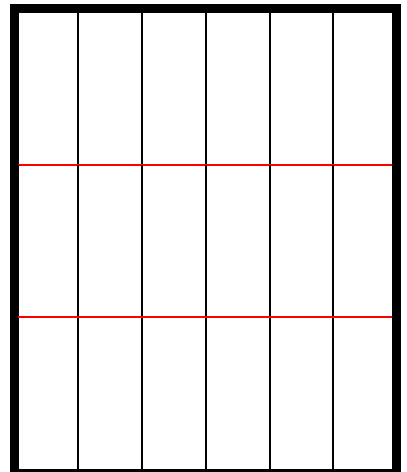





$$\div 2 =$$



$$\div 3 =$$



$$\div 6 =$$



今までの  を 数の式 に表すと

$$1 \div \text{■} = \frac{1}{2}$$

$$\frac{1}{3} \div 2 = \text{■}$$

$$1 \div \text{■} = \frac{1}{3}$$

$$\frac{1}{3} \div 3 = \text{■}$$

$$1 \div 6 = \frac{1}{\text{■}}$$

$$\frac{1}{3} \div 6 = \text{■}$$

$$\frac{1}{2} \div \text{■} = \frac{1}{4}$$

$$\frac{1}{6} \div \text{■} = \frac{1}{12}$$

$$\frac{1}{2} \div 3 = \text{■}$$

$$\frac{1}{6} \div \text{■} = \frac{1}{18}$$

$$\frac{1}{2} \div 6 = \text{■}$$

$$\frac{1}{6} \div \text{■} = \frac{1}{36}$$

$\frac{1}{2}$ や $\frac{1}{3}$ から始まっているのを 1 から始めると、

$$\frac{1}{2} \div 2 = \frac{1}{4}$$

$$1 \div 2 \div 2 = \frac{1}{4}$$

$$\frac{1}{2} \div 3 = \frac{1}{6}$$

$$1 \div 2 \div 3 = \text{■}$$



$$\frac{1}{2} \div 4 = \frac{1}{8}$$

$$1 \div \text{■} \div \text{■} = \frac{1}{8}$$



$$\frac{1}{2} \div 5 = \frac{1}{10}$$

$$\text{■} \text{■} \text{■} \text{■} \text{■}$$



$$\frac{1}{3} \div 2 = \frac{1}{6}$$

1 \div  \div  = $\frac{1}{6}$



$$\frac{1}{3} \div 3 = \frac{1}{9}$$

1 \div  \div  = $\frac{1}{9}$

$$\frac{1}{3} \div 4 = \frac{1}{12}$$

1 \div 3  

$$\frac{1}{3} \div 5 = \frac{1}{15}$$

1 \div  \div  = $\frac{1}{15}$

$\frac{1}{6}$	$\div 2$	$=$	$\frac{1}{12}$	
1	\div	\div	$=$	$\frac{1}{12}$

$\frac{1}{6}$	$\div 3$	$=$	$\frac{1}{18}$
		$=$	$\frac{1}{18}$

$\frac{1}{6}$	$\div 4$	$=$	$\frac{1}{24}$	
1	\div	\div	$=$	

$\frac{1}{6}$	$\div 5$	$=$	$\frac{1}{30}$